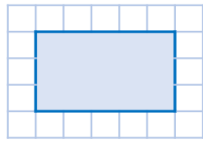


Year 4 Homework, Spring Term 1 Week 5 - Support

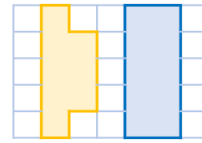
One

Calculate the perimeter of the shape.



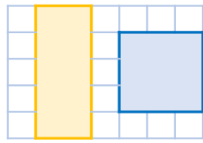
Four

What is the same and what is different about the shapes?



Two

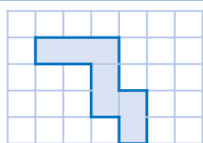
Which shape has the smallest perimeter?



Three

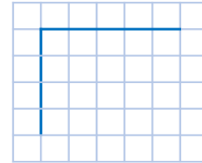
Match the shape to its perimeter.

7cm 14cm
16cm 20cm



Five

Ranjit is drawing a rectangle on a grid. He thinks the perimeter will be 9cm when it is complete.



Is he correct? Explain why.

Quick Comprehension: Have a go at the reading comprehension. Children should try to read the text, remember to decode any tricky or new words. Give yourself five to ten minutes to answer the questions. Some of the questions are quite tricky, so don't worry if you have to talk them through with an adult. Your parent can write your answers for you.

Spellings

June
flute
chute
rule
tune
rude
cube
mule
fume

SPaG Challenge in books please

③ Choose a verb from the box and add 'ing' to complete the sentences.

My sister is around the track.

I am the party at 8 o'clock.

Jason's popcorn is in the pan.

Dad is our dog for a walk.

We are to find our way home.

My aunt is the kitchen floor.

leave	race
mop	pop
take	try

Times Tables Activities

Please do some of the following:

Daily times tables on TT Rockstars

Daily chanting and oral questioning

Hit the Button – Times tables

Please remember: All homework is marked in class with the children and will not have written feedback on it.

Homework is due in on the following Friday