

Year 4 Homework, Spring Term 1 Week 3 - Support

Maths

One

Write number sentences for this.



Two

Complete the stem sentence.



_____ 3s.

Three

Write the multiplication sentence for

$$2 + 2 + 2 + 2 = 8$$

Four


Complete the number track.



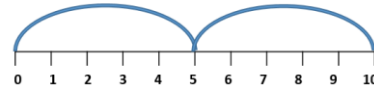
Five

Spot the odd one out. Explain.

$$5 \times 3$$



$$5 + 5 + 5$$



Reading:


Remember you must read every day for 15 minutes. This can be reading a book or practising your phonic or digraphs. Please record this in your Home link book.

Spellings

nail
rain
snail
drain
train
brain
jail
sail
chain
their

SPaG Challenge in books please

1 Draw lines to match the words to the correct tense.



stayed

stared

go

told


relax

run

bought

spoke

played



jump

are

Times Tables Activities

Please do some of the following:

- Daily times tables on TT Rockstars
- Daily chanting and oral questioning
- Hit the Button – Times tables

Please remember: All homework is marked in class with the children and will not have written feedback on it.

Homework is due in on the following Friday