



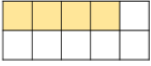
Year 4 Homework, Summer Term 1 Week 2

Maths: Fun Five!

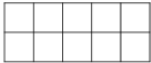


When writing tenths, the denominator is always ____.

How many tenths are shaded?



Shade 3 more than 4 tenths.



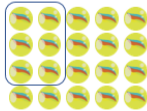
Asha has 10 donuts. She gives 6 away.

What fraction of the donuts does she have left?



Prove it...

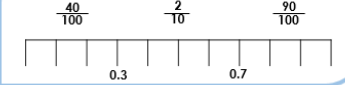
$\frac{3}{10}$ of the marbles are circled.



Complete the part-whole model.



Put the fractions on the number line.



What fraction and decimal does the image represent?

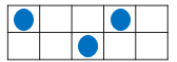


Draw an image to represent these decimals...

0.9 0.3 0.5

Jane doesn't think that the ten frame represents 3 tenths.

Describe the misconception that Jane has!



Quick Comprehension: Complete the reading comprehension. Children should allow themselves one minute to read the text, and five/ten minutes to answer the questions. Some of the questions are quite tricky, so don't worry if you have to talk them through with an adult.

Spellings

Core

wasp
water
swan
towards
woman
wonder
swollen
session
lesson
success
car
hard
I'll
I've
continue
minute

Support

mistake
misplace
misread
miscount
non-stop
non-drip
non-stick
non-starter
nonsense
fine
finer
finest
house
about
bicycle
circle

SPaG Challenge in books please

Write out Emil's shopping list using commas in the correct places.

Emil needs to buy
.....
and



Times Tables Activities

Please do some of the following:

- Daily times tables on TT Rockstars
- Daily time tables in booklet
- Times tables training grid
- Times tables wheels
- Daily chanting and oral questioning

Please remember: All homework is marked in class with the children and will not have written feedback on it.

Homework is due in on the following Friday.