



# Year 4 Homework, Spring Term 1 Week 2 - Support


## Maths

One   
\_\_\_ multiplied by \_\_\_.

Two   
Complete the stem sentence:  
\_\_\_ lots of \_\_\_.

Three   
\_\_\_ x \_\_\_ = \_\_\_  
or  
\_\_\_ x \_\_\_ = \_\_\_

Four Use counters to show  
 $2 \times 6 = 12$

Five Anita is looking at the number of eyes.  
Is she correct?  


## Reading:

Remember you must read every day for 15 minutes. This can be reading a book or practising your phonic or digraphs. Please record this in your Home link book.

## Spellings

pea  
team  
tea  
sea  
beach  
meat  
meal  
read  
seat  
there

## SPaG Challenge in books please

Circle the prepositions below.

under                      on                      to                      red  
   into                      today                      fox  
eight                      in                      over                      above                      his

## Times Tables Activities

Please do some of the following:

- Daily times tables on TT Rockstars
- Daily chanting and oral questioning
- Hit the Button – Times tables

Please remember: All homework is marked in class with the children and will not have written feedback on it.

Homework is due in on the following Friday