









Maths: Fun Five! Answer in book please.

- What are the missing numbers?
11  31 41 
 - What number is represented?

Tens	Ones
	
 - Write twenty eight in digits.
 - Complete this sequence.
   
 - Correct this number sentence. $4 \times 10 = 400$
- What are the next numbers in the sequence? **50, 100, 150**, __, __, __, __
 - What number does the arrow represent?

600	↓	800
-----	---	-----
 - What are these Roman Numerals in numbers? **XXVII LV**
 - Complete this stem sentence:
917 has ___ hundreds, ___ tens and ___ ones.
 - Round these numbers to the nearest 10.
547 673 209

Quick Comprehension: Complete the reading comprehension. Children should allow themselves one minute to read the text, and five/ten minutes to answer the questions. Some of the questions are quite tricky, so don't worry if you have to talk them through with an adult.

Spellings

Core

carries
carried
carrying
cries
cried
crying
touched
touching
rabbit
birds
duck
dragon
gran
grandad
breath
breathe

Support

little
kettle
nettle
bottle
cattle
rattle
tea
sea
seat
each
teach
reach
he
be
breath
breathe

SPaG Challenge in books please

Underline the verbs in the sentences below.

Jenny and Joe go to the cinema on Fridays.

He has a motorbike, a car and a van.

The supporters are happy with the referee's decision.

I do my homework as soon as I get home.

Susie often flies to Germany to see her friends.

Times Tables Activities

Please do some of the following:

Daily times tables on TT Rockstars

Daily time tables in booklet

Times tables training grid

Times tables wheels

Daily chanting and oral questioning

Please remember: All homework is marked in class with the children and will not have written feedback on it.

Homework is due in on the following Friday.