

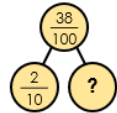
## Maths: Fun Five!

One

Complete the stem sentence:  
2.6 is equivalent to \_\_\_ wholes  
and \_\_\_ tenths.


Two

Complete the part-whole model.

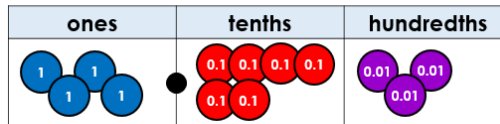


Three

Use counters to represent 2.4 on a place value grid.



What number does this place value grid show?



What decimal number is shown on the number line?



**Quick Comprehension:** Have a go at the reading comprehension. Children should try to read the text, remember to decode any tricky or new words. Give yourself five to ten minutes to answer the questions. Some of the questions are quite tricky, so don't worry if you have to talk them through with an adult. Your parent can write your answers for you.

### Spellings

draw  
dawn  
hawk  
saw  
lawn  
paw  
yawn  
claw  
jaw

### SPaG Challenge in books please

Shorten these words using an apostrophe.

was not ..... that will .....  
it will ..... where is .....  
did not ..... we are .....

### Times Tables Activities

Please do some of the following:

- Daily times tables on TT Rockstars
- Daily time tables in booklet
- Times tables training grid
- Times tables wheels
- Daily chanting and oral questioning

Please remember: All homework is marked in class with the children and will not have written feedback on it.

Homework is due in on the following Friday.