


Year 4 Homework, Spring Term 1 Week 2 - Support

Maths


One



___ multiplied by ___.


Two

Complete the stem sentence:



___ lots of ___.

Three



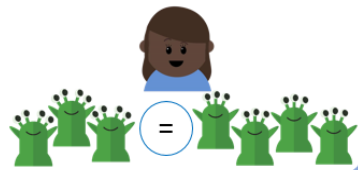
___ x ___ = ___
or
___ x ___ = ___

Four

Use counters to show

$$2 \times 6 = 12$$

Anita is looking at the number of eyes.
Is she correct?



=

Reading:

Remember you must read every day for 15 minutes. This can be reading a book or practising your phonic or digraphs. Please record this in your Home link book.

Spellings

these
theme
breeze
complete
scene
cheese
delete
extreme
complete

SPaG Challenge in books please

Circle the prepositions below.

under on to red
 into today fox
eight in over above his

Times Tables Activities

Please do some of the following:

Daily times tables on TT Rockstars
Daily chanting and oral questioning
Hit the Button – Times tables

Please remember: All homework is marked in class with the children and will not have written feedback on it.

Homework is due in on the following Friday