

Maths: Speedy Six

1. If the 1st of July falls on a Thursday, how many Saturdays will there be in a month?
2. Find the product of 0.005 and 20.
3. $7/8 \times 8$
4. 0.3×0.6
5. $(15 \times 8) \div 6$
6. $9x = 33 + 48$. Find the value of x.



Quick Comprehension: Complete the reading comprehension. Children should allow themselves one minute to read the text, and five/ten minutes to answer the questions. Some of the questions are quite tricky, so don't worry if you have to talk them through with an adult.

Spellings

Extension

You have finished the list of tricky words set by the Government so now we are going to do something a little different.

We would like you to develop your word knowledge even more. Look up the following words and write a sentence using them.

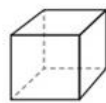
demure
diligent
eloquent

Optional Maths Extension:

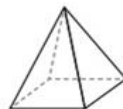
One bonus house point available

Here are diagrams of some 3-D shapes.

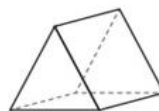
Tick each shape that has the same number of faces as vertices.



Cube



Square-based pyramid



Triangular prism



Triangular-based pyramid

Homework is due in on 21st June