



Maths: Speedy Six



1. What are all the factors of 12?
2. Round 456 to the nearest 10?
3. What is $3.45 \times 10 =$
4. What is 12 minutes before 3pm?
5. What is this shape? 
6. What is $78.2 \div 100$?



1. What are all the factors of 24?
2. Round 0.456 to the nearest tenth?
3. What is $3.045 \times 10 =$
4. What is 23 minutes before 3pm? 
5. What is this shape?
6. What is $732.2 \div 1000$?

We are going to be starting our new Whole Class Reading book – Swimming Against the Storm – in the next 2 weeks so if you want to have your own copy, you will need to bring it into school next week.

Reading Comprehension


Please complete the reading comprehension 'Ancient Egypt.'

Spellings

<u>Core</u>	<u>Support</u>
smaller	knife
wettest	knives
fitter	life
largest	lives
variety	glove
fasten	gloves
identity	lived
faster	white
fittest	inside
larger	strange

Optional Maths Extension:

One bonus house point available
Here are five number cards.



Use four of the cards to complete these calculations.

 $47 \div \square = \square$

$\square \times \square = 40.7$