

Maths: Speedy Six



1. $128 + 56$
2. $178 - 59 =$
3. 9×100
4. $8 + \underline{\quad} = 10$
5. $80 + \underline{\quad} = 100$
6. Write down 2 mathematical facts about this shape.



1. $23.44 \times 100 =$
2. $1234.2 - 334.6 =$
3. What is 1324 ml in litres? (Remember there are 1000ml in a litre.)
4. What is 20% of 600? (Remember find 10% first.)
5. $5543 \times 44 =$
6. What is the fraction equivalent to 0.5?

Quick Comprehension: Complete the comprehension. Children should allow themselves one minute to read the text, and five/ten minutes to answer the questions. Some of the questions are quite tricky, so don't worry if you have to talk them through with an adult.

Spellings

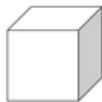




son
sun
blue
blew
night
knight

Optional Maths Extension:

One bonus house point available

3D Shape Properties

Match the shapes to the correct names.

	Sphere
	Cone
	Cube
	Cylinder
	Cuboid